

# Space Counting Mission

Count each space group. Write the number in the box. Then circle the correct answer.

1.




1

2

3

2.




2

3

4

3.




4

5

6

4.

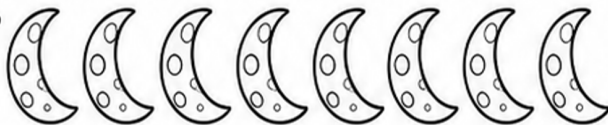


5

6

7

5.




7

8

9

6.



8

9

10